




1 a). Complète les cases :



1									

+

- b) effectue ces additions et soustractions et colorie dans le tableau la case qui porte la réponse en rouge.


$30 + 3 = \dots\dots\dots$	$30 - 2 = \dots\dots\dots$	$47 - 1 = \dots\dots\dots$
$10 - 6 = \dots\dots\dots$	$4 + 3 = \dots\dots\dots$	$20 + 2 = \dots\dots\dots$
$52 + 3 = \dots\dots\dots$	$6 - 3 = \dots\dots\dots$	$20 - 5 = \dots\dots\dots$
$7 + 5 = \dots\dots\dots$	$41 + 3 = \dots\dots\dots$	$8 - 2 = \dots\dots\dots$
$19 - 1 = \dots\dots\dots$	$39 - 2 = \dots\dots\dots$	

2. Recopie le dessin : il y a .... ronds, ..... carrés, ..... triangles, .....rectangles




1. Voici :

les billes de Julie



**Julie** a .....billes.

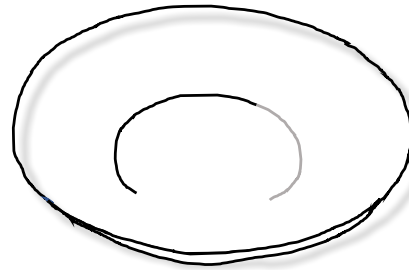
les billes de Marc



**Marc** a .....billes.

Complète : .....a plus de billes que .....

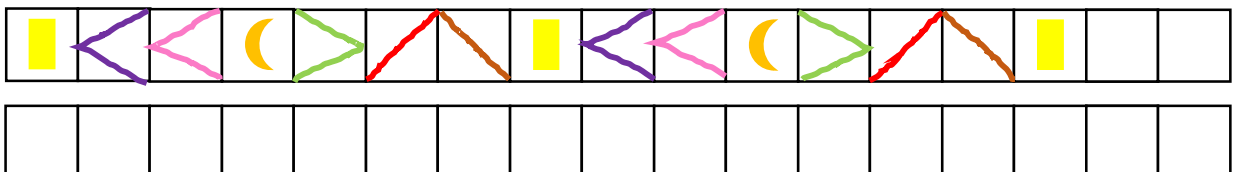
Si **Julie** et **Marc** déposent leurs billes dans cette sous-tasse. Combien y en aura-t-il ?



2. Effectue ces calculs :

$8 + \dots = 14$	$11 + \dots = 13$	$8 - 6 = \dots$	$8 - \dots = 3$
$\dots + 6 = 12$	$8 + 5 = \dots$	$16 - \dots = 8$	$\dots - 5 = 10$
$6 + 2 = \dots$	$6 + 7 = \dots$	$9 - \dots = 4$	$12 - 6 = \dots$
$9 + \dots = 13$	$9 + \dots = 14$	$\dots - 10 = 3$	$8 - 4 = \dots$
$7 + \dots = 8$	$\dots + 6 = 15$	$17 - 2 = \dots$	$\dots - 7 = 3$

3. Reproduis puis complète cette suite logique :





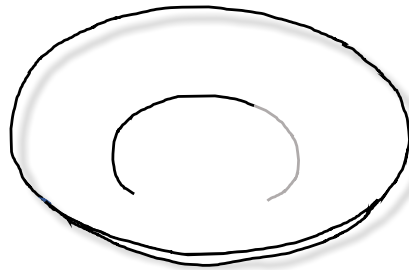
# Maths

1. Effectue ces calculs :

$6 + \dots = 18$	$15 + \dots = 17$	$10 - 6 = \dots$	$7 - \dots = 3$
$\dots + 9 = 20$	$8 + 4 = \dots$	$17 - \dots = 11$	$\dots - 7 = 12$
$8 + 8 = \dots$	$3 + 2 = \dots$	$9 - \dots = 3$	$10 - 6 = \dots$
$1 + \dots = 16$	$7 + \dots = 12$	$\dots - 4 = 3$	$9 - 5 = \dots$
$8 + \dots = 15$	$\dots + 9 = 13$	$14 - 1 = \dots$	$\dots - 8 = 2$

2. Que préparent ces deux cuisiniers (tu peux le dessiner) ?


e	f	g	i	j	k	l	o	p	r	s	t	u	v
5	6	7	8	9	10	11	12	13	14	15	16	17	18



6+7	4+8	9+8	5+6	3+2	7+9		3+3	7+7	4+4	8+8	1+4	7+8
						+						
						+						

3. Dans son panier, Lara a mis : (dessine)

- trois pommes
- deux citrons
- six oranges
- cinq carottes
- quatre bananes



Combien de fruits a-t-elle dans son panier ? .....fruits